

First Name: SOLUTIONS Last Name: _____ Section: _____

March 24, 2000

Physics 208

Exam 2

Print your name and section clearly on all five pages. (If you do not know your section number, write your TA's name.) Show all work in the space immediately below each problem. Your final answer must be placed in the box provided. Problems will be graded on reasoning and intermediate steps as well as on the final answer. Be sure to include units wherever necessary, and the direction of vectors. Each problem is worth 25 points. In doing the problems, try to be neat. Check your answers to see that they have the correct dimensions (units) and are the right order of magnitudes. You are allowed one 8½ x 11" sheet of notes and no other references. The exam lasts exactly 50 minutes.

(Do not write below)

SCORE:

Problem 1: _____

Problem 2: _____

Problem 3: _____

Problem 4: _____

TOTAL: _____

First Name: _____ Last Name: _____ Section: _____

1. A long, straight wire with a diameter of 10 mm carries a current of 40 A.

a. What is the magnitude of the magnetic field at 15 mm from the axis of the wire? (9 pts.)

$$B = \frac{\mu_0 I}{2\pi r} = \frac{4\pi \times 10^{-7} \times 40}{2\pi \times 15 \times 10^{-3}}$$

$$= 5.33 \times 10^{-4}$$

5.33 G

b. What is the force on an electron ($q = -1.6 \times 10^{-19}$ C) 15 mm from the axis of the wire moving parallel to the current with a speed of 3×10^6 m/s? (8 pts.)

$$\vec{F} = q \vec{v} \times \vec{B}$$

$$F = 1.6 \times 10^{-19} \times 3 \times 10^6 \times 5.33 \times 10^{-4}$$

$$= 2.56 \times 10^{-16}$$

away from the wire

2.56×10^{-16} N

c. A second, long straight wire is parallel to the first with its axis a distance of 15 mm from the other's axis and carries a current of 10 A in the opposite direction. What is the force on a unit length (1 m) of this wire? (8 pts.)

$$F = I_2 l B = 10 \times 1 \times 5.33 \times 10^{-4}$$

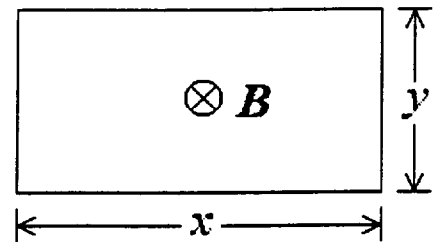
$$= 5.33 \times 10^{-3}$$

toward the wire

5.33×10^{-3} N

First Name: _____ Last Name: _____ Section: _____

2. A single-turn rectangular loop is oriented perpendicular to a uniform magnetic field of 0.5 T. The dimensions of the loop are $x = 30$ cm and $y = 15$ cm.



- a. What is the magnetic flux through the loop? (8 pts.)

$$\begin{aligned}\Phi &= BA = B \times y \\ &= 0.5 \times 0.3 \times 0.15 \\ &= 0.0225\end{aligned}$$

0.0225 Wb

- b. Assume the length of the loop is changing at a rate of $dx/dt = 4$ cm/s. What is the emf induced in the loop? (8 pts.)

$$\begin{aligned}\mathcal{E} &= \frac{d\Phi}{dt} = B y \frac{dx}{dt} \\ &= 0.5 \times 0.15 \times 0.04 \\ &= 0.003\end{aligned}$$

3 mV

- c. If the loop has a resistance of 0.5Ω , what force is required to expand the loop at a rate of $dx/dt = 4$ cm/s? (9 pts.)

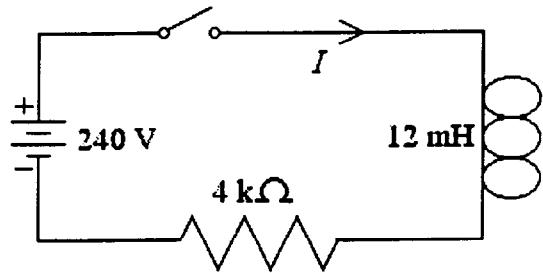
$$\begin{aligned}F &= I l B = \frac{\mathcal{E}}{R} y B \\ &= \frac{0.003}{0.5} \times 0.15 \times 0.5 \\ &= 4.5 \times 10^{-4}\end{aligned}$$

4.5×10^{-4} N

First Name: _____ Last Name: _____ Section: _____

3. The switch in the circuit below is closed at $t = 0$ when the current I is zero.

- a. What is the magnitude of the potential difference across the inductor at $6 \mu\text{s}$ after the switch is closed? (9 pts.)



$$\begin{aligned}
 V_L &= V_0 e^{-Rt/L} \\
 &= 240 e^{-4000 \times 6 \times 10^{-6} / 0.012} \\
 &= 32.5
 \end{aligned}$$

32.5 V

- b. What is the current I at $6 \mu\text{s}$ after the switch is closed? (9 pts.)

$$\begin{aligned}
 I &= I_0 (1 - e^{-Rt/L}) \\
 &= \frac{V_0}{R} (1 - e^{-2}) \\
 &= 0.0519
 \end{aligned}$$

51.9 mA

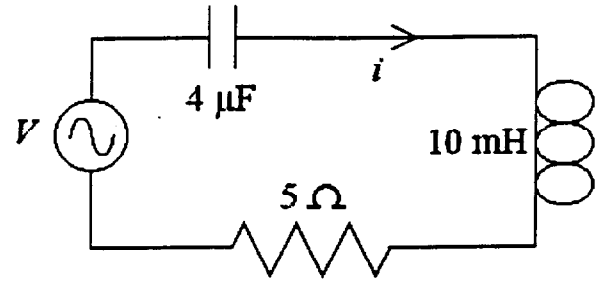
- c. What is the current I after the switch has been closed for a long time? (7 pts.)

$$\begin{aligned}
 I &= \frac{V_0}{R} = \frac{240}{4000} \\
 &= 0.06
 \end{aligned}$$

60 mA

First Name: _____ Last Name: _____ Section: _____

4. The series RLC circuit below contains a sinusoidal voltage source $V = 10 \sin \omega t$.



- a. For what value of ω is the current i a maximum? (8 pts.)

$$\begin{aligned}\omega &= \frac{1}{\sqrt{LC}} \\ &= \frac{1}{\sqrt{0.01 \times 4 \times 10^{-6}}} \\ &= 5000\end{aligned}$$

5000 s⁻¹

- b. At the frequency calculated above, what is the peak voltage across the inductor? (9 pts.)

$$\begin{aligned}V_L &= I \omega L = \frac{V}{R} \omega L \\ &= \frac{10}{5} \times 5000 \times 0.01 \\ &= 100\end{aligned}$$

100 V

- c. At the frequency calculated above, what wavelength electromagnetic wave is emitted by the circuit? (8 pts.)

$$\begin{aligned}\lambda &= \frac{c}{f} = \frac{2\pi c}{\omega} \\ &= \frac{2\pi \times 3 \times 10^8}{5000} \\ &= 3.77 \times 10^5\end{aligned}$$

377 km